

Thakur Educational Trust's (Regd)

Thakur Educational Trust's (Regd)

THAKUR VIDYA MANDIR HIGH SCHOOL & JR.COLLEGE

III Terminal Exam. 2016- 2017

Subject: Geography.

Name: _____ STD: VI Div: _____ Roll No: _____

Marks: 40

Date: 11/04/2017

Time: 2hr.

QI. A) Place a tick mark() against the correct option:

(4)

- 1) What is the shape of the meridians?
a) Circular b) Semi Circular c) Points
- 2) What is the angular distance of the arctic circle from the North Pole?
a) 66°30' b) 90° c) 23°30'
- 3) In which of the following parts of Maharashtra is granite rock found?
a) Western b) Southern c) Eastern
- 4) Which of the following natural vegetations is found in polar regions?
a) Tropical Grasslands b) Broadleaved c) Tundra

QI. B) Read the following statements and correct the wrong ones:

(5)

- 1) Types of land influence the climate of a region.
- 2) Parallels of latitudes lie parallel to the prime meridian
- 3) Natural resources are to be used in a judicious manner.
- 4) The water heats up and cools down slowly.
- 5) As we move upwards from the sea level, the temperature of air decreases.

Q II) A) Who am I ?

(4)

- 1) I am a rock which can be used as fuel.
- 2) I am a rock formed out of molten material.
- 3) Land and water gets heated due to me.
- 4) I connect places of equal temperatures.

QII) B) Answer the following questions in one sentence each : (any-5)

(5)

- 1) Which occupations are called primary occupations?
- 2) Where is high quality coal used on large scale?
- 3) Where do minerals come from?
- 4) Of which things is the earth's crust made of?
- 5) Which sea is known to have the maximum salinity?
- 6) What is called the annual range of temperature?

QIII. A) Answer in brief (any 3)

(6)

- 1) Why do we need to use environment - friendly energy resources?
- 2) What are the main features of secondary occupations?
- 3) Write the uses of minerals.
- 4) What are the causes of pollution of oceanic water?

QIII. B) Write the difference between the following

(4)

- 1) Mineral oil and solar energy.
- 2) Hydel power and power from geo-thermal source.

QIV. A) Give geographical reasons for the following statements (Any two).

(4)

- 1) 1) The climate near the sea is humid.
- 2) Continental areas have an extreme climate.
- 3) In the Northern Hemisphere, the distance between the isotherms varies.

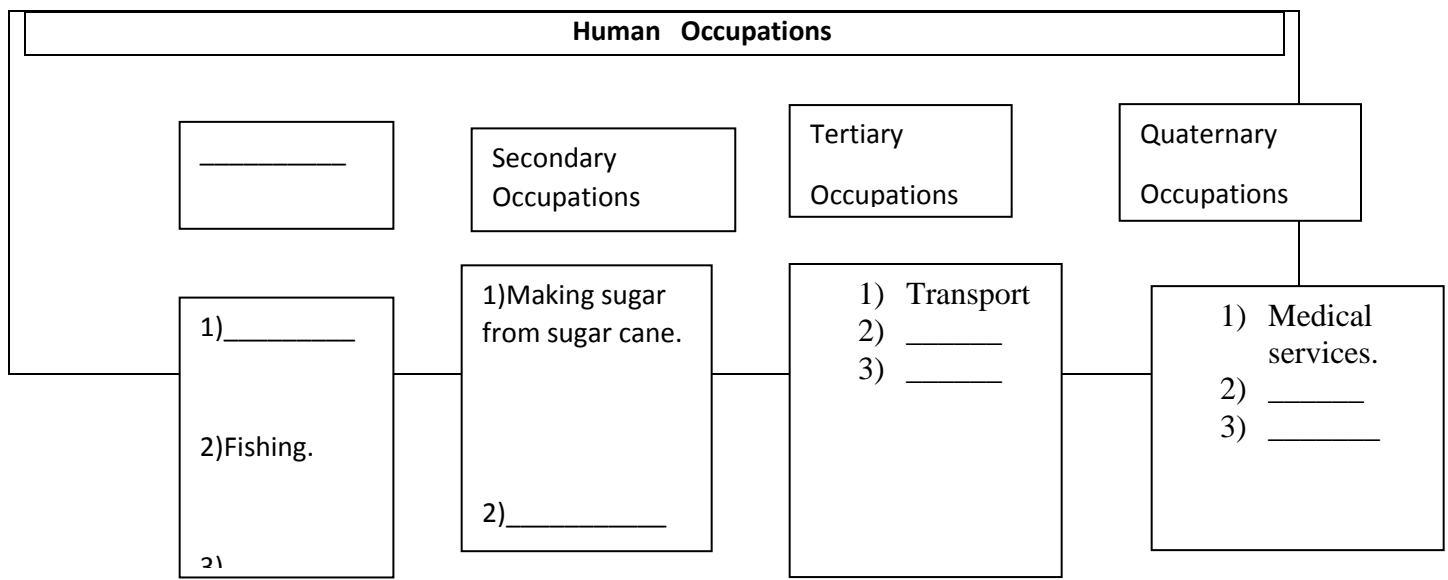
QIV. B) Name the following :

(4)

- 1) Products obtained from animals.
- 2) Animals employed for transportation and carrying goods.
- 3) Countries using atomic energy.
- 4) Substance based energy resources

QIV. C) Complete the following flow chart

(4)



******ALL THE BEST******
Natural Resources

HAKUR VIDYA MANDIR HIGH SCHOOL & JR.COLLEGE

III Terminal Exam. 2016- 2017

Subject: Geography.

Name: _____ STD: VI Div: _____ Roll No:

Marks :40
: 2hrs

Date : 11/04/2017

Time

QI A) Place a tick mark against the correct options

(4)

- 3) What is the shape of the meridians?
a) Circular b) Semi Circular c) Points
- 4) What is the angular distance of the arctic circle from the North Pole?
a) 66°30' b) 90° c) 23°30'
- 5) In which of the following parts of Maharashtra is granite rock found?
a) Western b) Southern c) Eastern
- 6) Which of the following natural vegetations is found in polar regions?
a) Tropical Grasslands b) Broadleaved c) Tundra

QI B) Read the following statements and correct the wrong ones:

- 6) Types of land influence the climate of a region.
- 7) Parallels of latitudes lie parallel to the prime meridian
- 8) Natural resources are to be used in a judicious manner.
- 9) The water heats up and cools down slowly.
- 10) As we move upwards from the sea level, the temperature of air decreases.

QII A) Who am I?

- 5) I am a rock which can be used as fuel.
- 6) I am a rock formed out of molten material.
- 7) Land and water gets heated due to me.
- 8) I connect places of equal temperatures.

QII B) Answer the following questions in one sentence each. (Any - 5)

- 7) Which occupations are called primary occupations?
- 8) Where is high quality coal used on large scale?
- 9) Where do minerals come from?
- 10) Of which things is the earth's crust made of?
- 11) Which sea is known to have the maximum salinity?
- 12) What is called the annual range of temperature?

QIII A) Answer in brief. (Any-3)

- 1) Why do we need to use environment - friendly energy resources?
- 2) What are the main features of secondary occupations?
- 3) Write the uses of minerals.
- 4) What are the causes of pollution of oceanic water?

QIII B) Explain the differences using the points in the brackets.

(Points: Availability, Environment-friendliness, Advantages and Disadvantages)

- 3) Mineral oil and solar energy.
- 4) Hydel power and power from geo-thermal source.

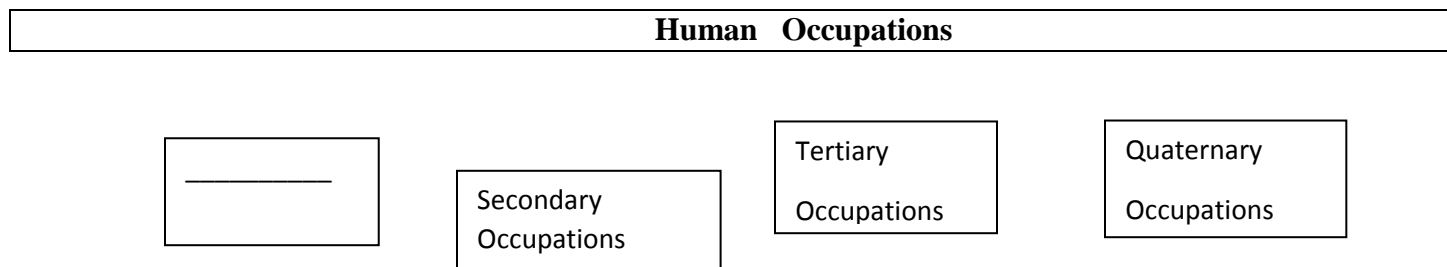
QIV A) Give geographical reason. (Any 2).

- 4) The climate near the sea is humid.
- 5) Continental areas have an extreme climate.
- 6) In the Northern Hemisphere, the distance between the isotherms varies.

QIV B) Name the following:

- 4) Products obtained from animals.
- 5) Animals employed for transportation and carrying goods.
- 6) Countries using atomic energy.
- 7) Substance based energy resources.

QIV C) QIV. C) Complete the following flow chart



1) _____

2) Fishing.

21

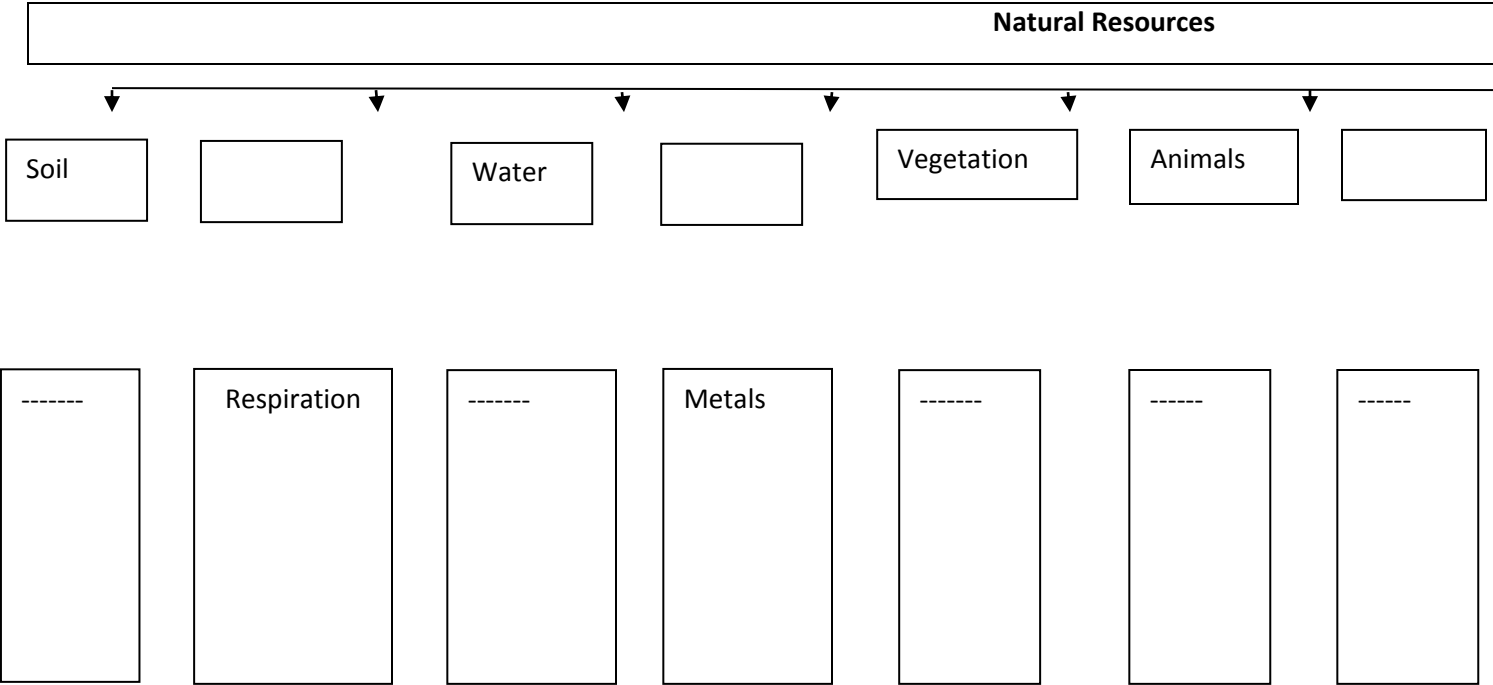
1) Making sugar
from sugar cane.

2) _____

4) Transport
5) _____
6) _____

4) Medical
services.
5) _____
6) _____

****ALL THE BEST****



Thakur Educational Trust's (Regd)

THAKUR VIDYA MANDIR HIGH SCHOOL & JR.COLLEGE

III Terminal Exam. 2016- 2017

Subject: History/Civics.

Name: _____ STD: VI Div: _____ Roll No: _____

Marks: 40

Date: 08/04/2017

Time:2hrs.

QI)A) Fill in the blanks choosing the correct words from the brackets.

(3)

- 1) The trade route from China reached _____ (Egypt, Iran, Arabia)
- 2) The Stone Age Man expressed his emotions in (poems, sculptures, paintings)
- 3) The first Church in India was founded at Pallayur in _____ district by St. Thomas. (Cochin, Trichur, Travancore)

QIB) Match the column: -

(3)

A

B

- | | |
|-------------------|-----------------------|
| 1) Bhagdugh | 1) Emperor of Magadha |
| 2) Emperor Ashoka | 2) Ratnavali |
| 3) Harshavardhan | 3) Collected taxes |
| | 4) chief priest |

QII Answer in 25- 30 words (any 2)

(4)

- 1) What materials were used for writing in the past?
- 2) Who made efforts to reduce the growing superstition in society?
- 3) Which pillar inscription describes Samudragupta's conquests?

QIII) Give Reason (any 2)

(4)

- 1) Importance of priests increased in the vedic period.
- 2) Ashoka is regarded as an ideal king.
- 3) The iron pillar at Mehrauli is an excellent specimen of metallurgical skill.

QIV) Answer in 40-50 words - (any -2)

(6)

- 1) Write in short about Harappan pottery.
- 2) What is meant by Tri-Samudra -toya-peet-vahan?
- 3) What is meant by Sangham literature?

QV) Answer in 60-80 words (any -2)

(8)

- 1) Write about the rule of the Nanda dynasty.
- 2) Write about Samudragupta in brief.
- 3) Write about Gandhara School of Art.

CIVICS

QVI) Fill in the blanks choosing the correct words from the brackets.

(3)

- 1) Our social life is _____.
(emotional, interdependent, stable)
- 2) Religious harmony has been promoted by _____. (co-operation, secularism, tradition)
- 3) The District Collector is appointed by the _____. (local government, State government, Union government)

QVII) Answer in one sentence (any 3)

(3)

- 1) Who is regarded as the first citizen of the city?
- 2) Name the constituents of the Panchayati Raj?
- 3) Which disasters can we be forewarned about?
- 4) Whose company do we like?
- 5) Why have we accepted the principle of secularism?

QVIII) State True Or False with reason (any -2)

(4)

- 1) A member of the Municipal Corporation is called as a councillor.
- 2) The District Collector is the head of the district administration.
- 3) A Group Gram Panchayat is established for villages having population less than 2500.

IX) Answer in 25-30 words (Any -1)

(2)

- 1) Write about Disaster management in short.
- 2) What are the opportunities available in the cities?

******ALL THE BEST******

Thakur Educational Trust's (Regd)

THAKUR VIDYA MANDIR HIGH SCHOOL & JR.COLLEGE

III Terminal Exam 2016- 2017

Subject: I.T.

Name: _____ STD: VI Div: _____ Roll No: _____

Marks: 50

Date: 12/04/2017

Time : 2hrs

QI) Fill in the blanks:-

(8)

- 1) Alignment buttons are available on the _____ toolbar.
- 2) A _____ is a horizontal series of cells in a table.
- 3) The cell with the bold boundary is the _____ cell.
- 4) _____ is a computer where information is stored in electronic pages.
- 5) BCC stands for _____.

6) _____ operator takes first precedence in the arithmetic operators.

7) A keyboard looks similar to a _____.

8) The _____ is a wonderful medium for communication, research and the exchange of information.

QII) Match the following :-

(3)

(A)

(B)

1) ^

a) Logical operator

2) <

b) Arithmetic operator

3) AND

c) Relational operator

QIII) State whether the following statements are True or False:-

(8)

- 1) By default, an MS-word document has one column.
- 2) Output produced on a VDU is permanent.
- 3) A record is a collection of variable data regarding one person or thing.
- 4) You cannot change the fill color and pattern of any closed object.
- 5) Three types of data can be entered in an MS-Excel worksheet.
- 6) MS-Word and MS-office do not have their own ClipArt library.
- 7) Margins are measured in inches.
- 8) The Main document should always be created first.

QIV) Define the following :-

(6)

- 1) Row
- 2) URL
- 3) Column

QV) Answer the following:-

(10)

- 1) What are computer peripherals?
- 2) How can you delete an entire table in MS-Word?

- 3) What are the different types of data that can be entered in an MS-Excel worksheet?
- 4) Differentiate between CC and BCC options in composing mail.
- 5) What are the relational operators of BASIC?

QVI) Answer in Brief :-

(10)

- 1) Explain the various features of an e-mail program.
- 2) Write the hierarchical order of the arithmetic operators in BASIC.

QVIII) Write the steps for the following :-

(5)

- 1) Gurpreet's class teacher wants him to create a table with 4 columns and 5 rows to enter names, roll numbers, class and section of four of her students. Help Gurpreet in this process.

******ALL THE BEST******